

# Quantum Processes and Computation

Assignment 3, Friday, 27 Oct, 12:00

**Deadline:** Monday Week 5

**Goals:** After completing these exercises you should know about (orthonormal) bases, composition of linear maps, encoding logic gates as linear maps, pure quantum states and maps, and  $\otimes$ -positivity.

Material covered in book: Sections 5.1, 5.2, 5.3, 6.1, and 6.2.

**Note:** Many of these exercises also appear in *Picturing Quantum Processes*, but sometimes they have been modified for the problem sheet. The corresponding exercise number from the book is shown in brackets. **If you are stuck, try looking up the exercise number in the book. Usually the definitions or equations you need are nearby.**

**Exercise 1 (5.54):** Let

$$\begin{array}{c} \downarrow \\ \psi \\ \downarrow \end{array} \leftrightarrow \begin{pmatrix} \psi^0 \\ \psi^1 \end{pmatrix} \quad \text{and} \quad \begin{array}{c} \uparrow \\ \phi \\ \uparrow \end{array} \leftrightarrow (\phi_0 \ \phi_1)$$

be respectively a 2-dimensional state, and 2-dimensional effect. Let  $\lambda$  be a number. Write the matrices for the processes

$$(i) \quad \begin{array}{c} \lambda \\ \downarrow \\ \psi \\ \downarrow \end{array} \quad (ii) \quad \begin{array}{c} \downarrow \\ \psi \\ \downarrow \end{array} \begin{array}{c} \uparrow \\ \phi \\ \uparrow \end{array} \quad (iii) \quad \begin{array}{c} \uparrow \\ \psi \\ \uparrow \end{array} \begin{array}{c} \uparrow \\ \phi \\ \uparrow \end{array} \quad (iv) \quad \begin{array}{c} \uparrow \\ \phi \\ \uparrow \\ \downarrow \\ \psi \\ \downarrow \end{array}$$

**Exercise 2 (5.58):** The matrices for cups and caps in 2 dimensions are:

$$\begin{array}{c} \cup \end{array} \leftrightarrow \begin{pmatrix} 1 \\ 0 \\ 0 \\ 1 \end{pmatrix} \quad \begin{array}{c} \cap \end{array} \leftrightarrow (1 \ 0 \ 0 \ 1)$$

(i) First, verify the yanking equation

$$\begin{array}{c} \uparrow \\ \cap \\ \uparrow \\ \downarrow \\ \cup \\ \downarrow \end{array} = \begin{array}{c} | \end{array}$$

directly using the matrices of the 2-dimensional cup and cap by using the rules for sequential and parallel composition of matrices, i.e. show that  $(\cap \otimes \text{id}) \circ (\text{id} \otimes \cup) = \text{id}$  (where  $\text{id}$  is the  $2 \times 2$  identity matrix).

(ii) Second, give the matrices for the cup and cap in 3 dimensions.

The next exercise is about encoding classical logic gates in the theory of **linear maps**, as explained in Section 5.3.4. Recall that a classical logic gate  $F$  can be encoded as a linear map

via:

$$\begin{array}{|c} \hline f \\ \hline \end{array} = \sum_{(a_1 \dots a_m \mapsto b_1 \dots b_n) \in F} \begin{array}{|c} \hline b_1 \\ \hline \end{array} \dots \begin{array}{|c} \hline b_n \\ \hline \end{array} \\ \begin{array}{|c} \hline a_1 \\ \hline \end{array} \dots \begin{array}{|c} \hline a_m \\ \hline \end{array}$$

Using this encoding, we defined:

$$\begin{array}{|c} \hline \text{XOR} \\ \hline \end{array} = \begin{array}{|c} \hline 0 \\ \hline \end{array} \begin{array}{|c} \hline 0 \\ \hline \end{array} + \begin{array}{|c} \hline 1 \\ \hline \end{array} \begin{array}{|c} \hline 0 \\ \hline \end{array} + \begin{array}{|c} \hline 1 \\ \hline \end{array} \begin{array}{|c} \hline 1 \\ \hline \end{array} + \begin{array}{|c} \hline 0 \\ \hline \end{array} \begin{array}{|c} \hline 1 \\ \hline \end{array}$$

$$\begin{array}{|c} \hline \text{CNOT} \\ \hline \end{array} := \begin{array}{|c} \hline 0 \\ \hline \end{array} \begin{array}{|c} \hline 0 \\ \hline \end{array} + \begin{array}{|c} \hline 0 \\ \hline \end{array} \begin{array}{|c} \hline 1 \\ \hline \end{array} + \begin{array}{|c} \hline 1 \\ \hline \end{array} \begin{array}{|c} \hline 1 \\ \hline \end{array} + \begin{array}{|c} \hline 1 \\ \hline \end{array} \begin{array}{|c} \hline 0 \\ \hline \end{array}$$

$$\begin{array}{|c} \hline \text{COPY} \\ \hline \end{array} := \begin{array}{|c} \hline 0 \\ \hline \end{array} \begin{array}{|c} \hline 0 \\ \hline \end{array} + \begin{array}{|c} \hline 1 \\ \hline \end{array} \begin{array}{|c} \hline 1 \\ \hline \end{array}$$

**Exercise 3 (5.86):** Show that

$$\begin{array}{|c} \hline \text{CNOT} \\ \hline \end{array} = \begin{array}{|c} \hline \text{XOR} \\ \hline \end{array} \begin{array}{|c} \hline \text{COPY} \\ \hline \end{array}$$

(Hint: try comparing the LHS to the RHS on all basis states, rather than writing out a big sum.)

Next, find  $\psi$  and  $\phi$  such that the following equation holds:

$$\begin{array}{|c} \hline \text{XOR} \\ \hline \end{array} \begin{array}{|c} \hline \text{COPY} \\ \hline \end{array} = \begin{array}{|c} \hline \phi \\ \hline \end{array} \begin{array}{|c} \hline \psi \\ \hline \end{array}$$

Although it might not look like much now, this equation will turn out to lie at the heart of the notion of *complementarity* which we will cover in great depth in the coming lectures.

**Exercise 4 (5.93):** In the proof of proposition 5.92, we see the Hadamard process written in matrix form with respect to the Z basis:

$$\begin{array}{|c} \hline H \\ \hline \end{array} = \begin{array}{|c} \hline 0 \\ \hline \end{array} \begin{array}{|c} \hline 0 \\ \hline \end{array} + \begin{array}{|c} \hline 1 \\ \hline \end{array} \begin{array}{|c} \hline 1 \\ \hline \end{array} = \frac{1}{\sqrt{2}} \left( \begin{array}{|c} \hline 0 \\ \hline \end{array} \begin{array}{|c} \hline 0 \\ \hline \end{array} + \begin{array}{|c} \hline 1 \\ \hline \end{array} \begin{array}{|c} \hline 0 \\ \hline \end{array} + \begin{array}{|c} \hline 0 \\ \hline \end{array} \begin{array}{|c} \hline 1 \\ \hline \end{array} - \begin{array}{|c} \hline 1 \\ \hline \end{array} \begin{array}{|c} \hline 1 \\ \hline \end{array} \right)$$

From this we can conclude the matrix of  $H$  (with respect to the Z-basis) is:

$$\begin{array}{|c} \hline H \\ \hline \end{array} \leftrightarrow \frac{1}{\sqrt{2}} \begin{pmatrix} 1 & 1 \\ 1 & -1 \end{pmatrix}$$

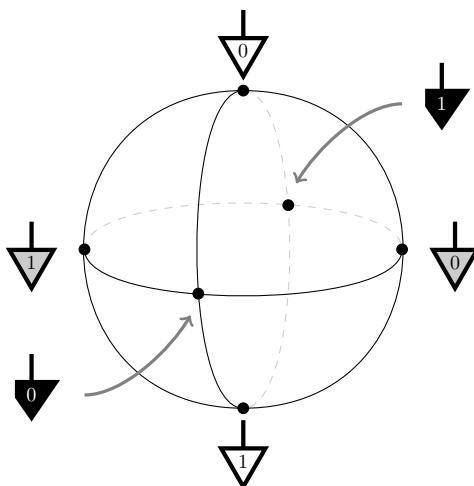
What is the matrix of  $H$  in the  $X$ -basis?

In section 6.1.2, it was shown that 2D quantum pure states correspond to points on a sphere.

**Exercise 5 (6.7):** Show that the following points:

$$\begin{aligned} \downarrow_0 &:= \text{double} \left( \frac{1}{\sqrt{2}} \left( \downarrow_0 + \downarrow_1 \right) \right) \\ \downarrow_1 &:= \text{double} \left( \frac{1}{\sqrt{2}} \left( \downarrow_0 - \downarrow_1 \right) \right) \\ \blacktriangledown_0 &:= \text{double} \left( \frac{1}{\sqrt{2}} \left( \downarrow_0 + i \downarrow_1 \right) \right) \\ \blacktriangledown_1 &:= \text{double} \left( \frac{1}{\sqrt{2}} \left( \downarrow_0 - i \downarrow_1 \right) \right) \end{aligned}$$

are located on the Bloch sphere as follows:



**Exercise 6 (6.10 & 6.22):**

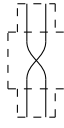
(i) Show that doubling preserves parallel composition:

$$\text{double} \left( \begin{array}{c} \downarrow \\ \boxed{f} \\ \downarrow \end{array} \begin{array}{c} \downarrow \\ \boxed{g} \\ \downarrow \end{array} \right) = \begin{array}{c} \downarrow \\ \boxed{\hat{f}} \\ \downarrow \end{array} \begin{array}{c} \downarrow \\ \boxed{\hat{g}} \\ \downarrow \end{array}$$

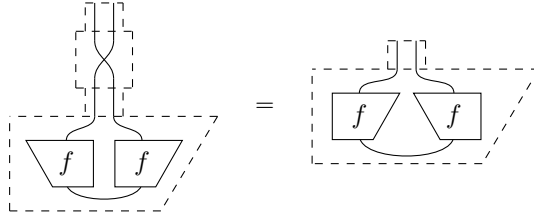
- (ii) Show that doubling preserves normalisation: that a state  $\psi$  is normalised if and only if its doubled state  $\hat{\psi}$  is normalised.
- (iii) Show that doubling preserves orthogonality: that states  $\psi$  and  $\phi$  are orthogonal if and only if  $\hat{\psi}$  and  $\hat{\phi}$  are orthogonal.

**Hint:** Use theorem 6.17 for the latter two points.

The transpose of a positive process is again a positive process and by bending some wires we can also take the ‘transpose’ of a  $\otimes$ -positive state, i.e. of a quantum state (see **Corollary 6.36**). This transpose acts as a swap of wires on the doubled system:

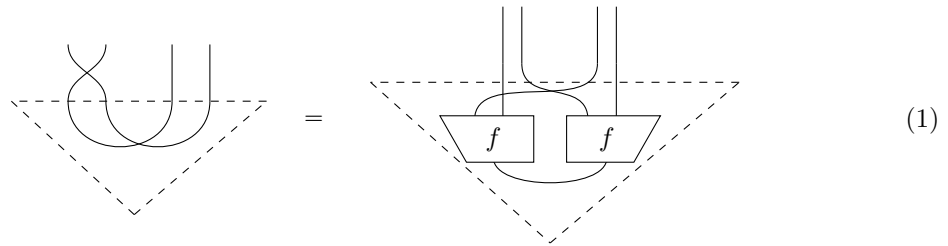


and it indeed sends quantum states to quantum states:



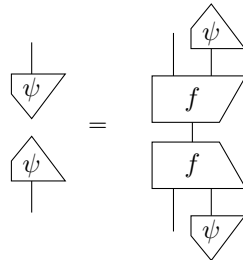
In the next exercise we will show that nevertheless, this swap of wires is *not* a quantum operation.

**Exercise 7:** In this exercise we will show that a swap applied to one pair of the wires of the doubled cup state will result in a state that is no longer  $\otimes$ -positive, and therefore not a quantum state. We will do this by contradiction. So suppose:




for some process  $f$ .

(i) Let  $\psi$  be a normalised state. Show that the equation above implies that



and hence, by Proposition 5.74, that there exist states  $a$  and  $b$  such that:



(ii) Plug  $\psi$  into equation 1 and use equation 2 to show that the identity wire disconnects. Conclude that therefore the swap can't be a quantum map.

**Note:** In proposition 6.48 it is also shown that the swap is not a quantum operation, but it uses a specific counter-example found in **linear maps**. The proof above only uses string diagrams and the property implied by proposition 5.74.